

2020

ZOOLOGY - HONOURS

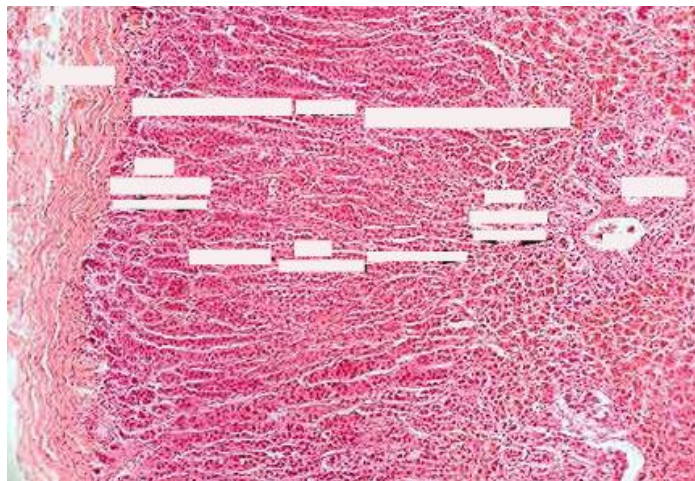
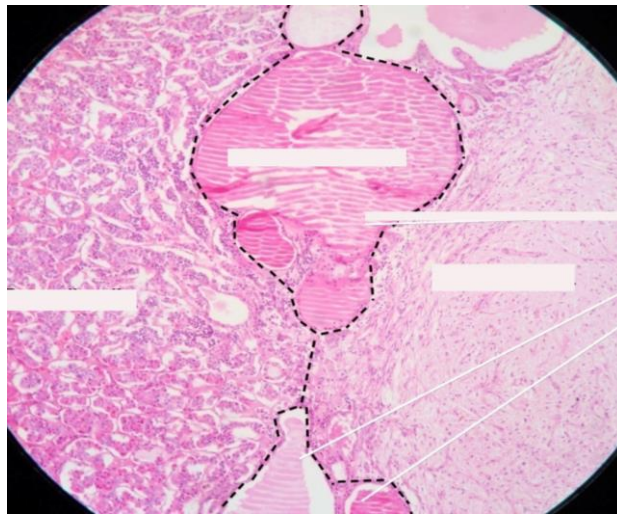
Paper: DSE (B)-5-2-P

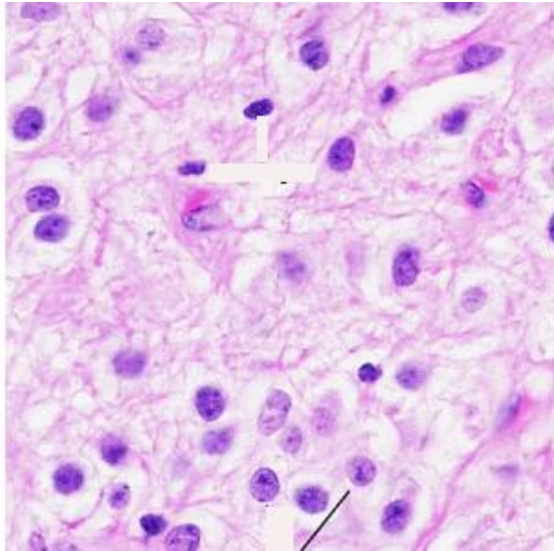
Full Marks: 30

Answer the following questions:

1. Identify with four reasons the specimens marked A, B, C.

(4+1) x 3=15





C.

2. Define fixative with an example. Describe the process of fixation by a flowchart  
 $2+1+5=8$
3. What do you mean by double staining? Write the procedure of H-E staining in a flowchart.  
 $2+5=7$